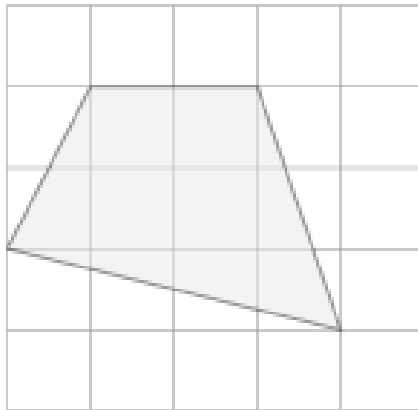
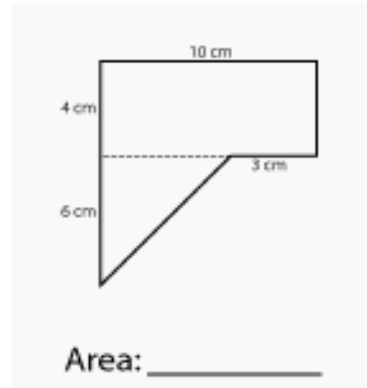
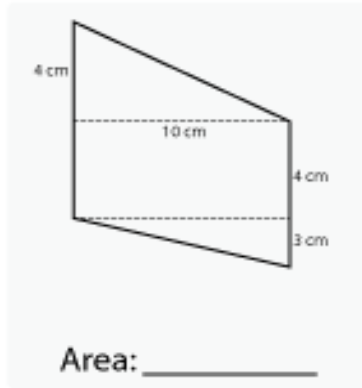
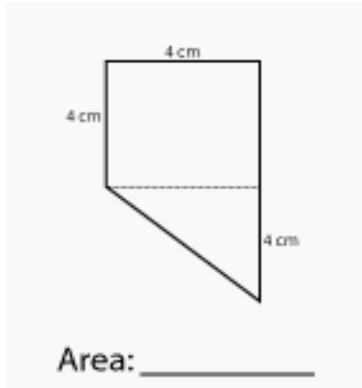


TUESDAY HOMEWORK: Areas of Composite Figures 1

Find the area of the following figures:



Area: _____

Two angles are supplementary. One angle measures 6 degrees more than twice the other. What are the measures of the two angles?

<p>Picture:</p>	<p>Equation</p>	<p>Answer: $X =$ _____ Angle 1 = _____ Angle 2 = _____</p>
-----------------	-----------------	--