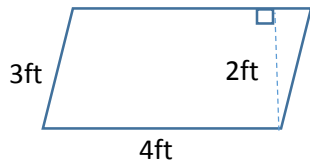
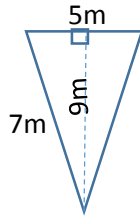


MONDAY HOMEWORK: Areas of parallelograms and triangles.

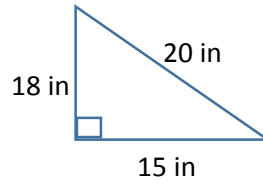
Find the area of the following figures:



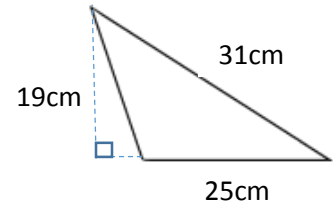
Area = _____



Area = _____



Area = _____



Area = _____

Two angles are complimentary. One angle is four times as big as the other. What are the measures of the two angles?

Picture:	Equation	Answer:
		X= _____ Angle 1= _____ Angle 2= _____